


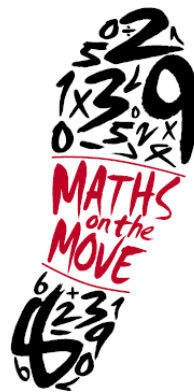
11

**What  
number is  
100 more  
than 4625?**



472

**Write six  
hundred and  
forty as a  
number.**




64

**$3 \times 10 + 2$**




3

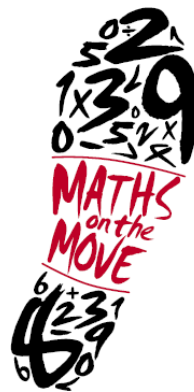
**$55 \div 5$**



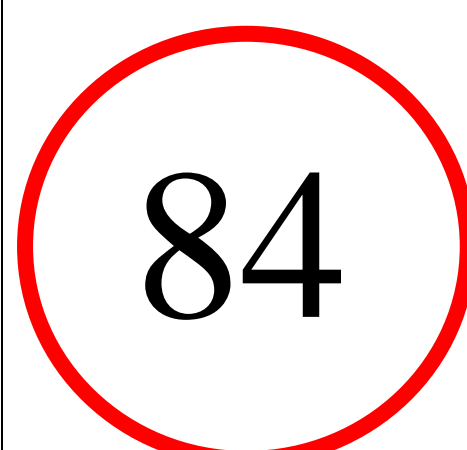

**24, 21, 18,  
\_\_, 12, 9**




**What  
number is  
XXXIX?**



**$640 + 200$**




**What is  
 $£3.25 + 75p$ ?**



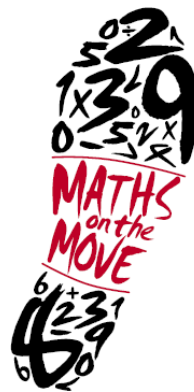
£4.0

**How many  
days are  
there in  
September?**



30

**How many faces  
does a cube  
have?**




6

**True or False?  
Half of 70 is  
33**




False

**4000 +  
2000 + 800  
= \_\_\_\_\_**



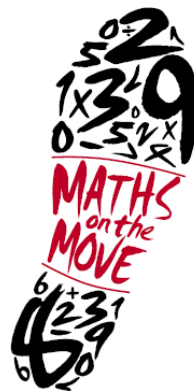
680

**What is  
50cm +  
50cm +  
12cm?**




112<sub>c</sub>

**True or False?  
849 rounded  
to the nearest  
100 is 800**



True


**8500 – 200  
= \_\_\_\_\_**



830

**What is the  
sum of 35  
and 75?**

Start here

A circular trail of 18 empty rounded rectangular boxes, arranged in a ring around the central text. The boxes are teal-outlined and intended for students to write numbers as they follow the trail.

# Number Trail Answer Sheet